

Reading

1. What has happened here?
2. Why is the boy hanging from the tree?
3. Why is she wearing ice skates but he isn't?
4. What might she be saying to him?
5. How is he going to get down?



Mental Maths and fluency

Partition a larger number in to **Tens** and **Ones**.

34	tens		3 tens = 30
	ones		4 ones = 4

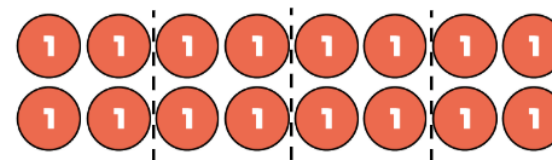
52	tens		_ tens =
	ones		_ ones =

Spelling — suffixes /er/

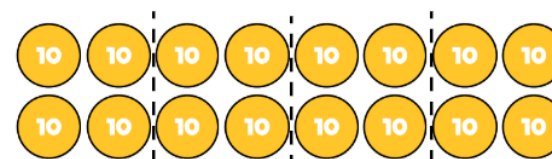
Double up the consonant

Root word	+ <u>er</u>	Root word	+ <u>er</u>
wet	wet <u>ter</u>	fat	
big		hot	
flat		sad	
thin			

Maths — related calculations



$$16 \div 2 = \square \quad 16 \div 4 = \square$$



$$160 \div 2 = \square \quad 160 \div 4 = \square$$

Geography

Can you create a poster all about ancient Rome?



D&T

Can you design an Automata style toy that has moving parts?



Science

Can you find out what the difference is between these types of rock? Draw and label them.








PSHE

Can you create a list of dreams and hopes you have for this year?



French

Can you match the French and English words for each instrument?

la trompette	the drums	
la batterie	the trumpet	
la guitare	the recorder	
la clarinette	the guitar	
la flûte à bec	the clarinet	

RE

Can you create a colourful and decorated version of the Aum symbol?



Year 3's Home Learning

Homework due back on 22.1.25